

Western Music (Grade 07) Answer Sheet - Part I & II

Part I

Question	Answer
01.	4
02.	2
03.	3
04.	1
05.	3
06.	3
07.	3
08.	1
09.	3
10.	4
11.	1
12.	2
13.	3
14.	3
15.	1
16.	4
17.	3
18.	2
19.	4
20.	4

- I. What is the time signature of this music? $\frac{3}{4}$ / simple triple. (01 mark)
- II. Name the notes of bar number 1 and 2. Bar 01 - D, G, A, B, C. (04 marks)
Bar 02 - D, G, G
- III. Write the 4 dynamics marks of his music
- | | | |
|--------------------|---------------------------|------------|
| 1) <i>mf</i> | 2) <i>p</i> | |
| 3) <i>f</i> | 4) <i>crescendo</i> | (04 marks) |
| (5) <i>dim.</i> | (6) <i>Decrescendo</i> | |
- IV. How many sections are there in this music? 2 sections. (01 mark)
- V. What is the form of this music? Binary form. (02 marks)
- VI. This music is taken from Anna Mandalena note book. Who is the composer of this music?
J.S. Bach. (02 marks)
- VII. What is the musical period does he belong? Baroque period. (02 marks)
- VIII. What is the highest note of this music? B. (01 mark)
- IX. What is the lowest note of this music? D. (01 mark)
- X. What is the accidental note can see in bar 20? C# (02 marks)

- 2) I. Name the following notes. (05 marks)

a) ... B ^b	b) E [#]	c) F [#]	d) A ^b	e) F [#]

- II. Write the correct rests to the given notes. (05 marks)

a	b	c	d	e

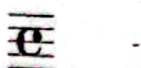
- III. Add the correct time signatures to the following music. (06 marks)

a.

b.


c.


IV. Write the similar time signature to the followings. (04 marks)


- $\frac{4}{4}$
- $\frac{3}{2}$

3)

I. Add on accidentals and missing notes to make the scales given below. (04 marks)

a. 

b. 

II. This is the C major scale write the answers for required questions. (06 marks)



- Circle the tonic and super tonic note.
- Draw a square around the dominant note.
- Draw a circle around the notes of the upper tetra chord.
- Write the name median note of the scale.
- Draw a star mark above or lower to the "C" note.
- Draw a rectangle around the "Fah" note of this scale.

III. Transpose the following passage as octave higher in the same clef. (06 marks)



IV. Name the following intervals and mention whether it is harmonic or melodic. (04 marks)

a.



Harmonic
6th

b.



Melodic
7th


c.



Melodic
4th

4)


I. Write the tonic triads as required. (06 marks)



a. G Major tonic triad



b. F Major tonic triad



c. C Major tonic triad

II. Briefly explain about of the followings. (04 marks)

a. Waltz

Type of dance and music in $\frac{3}{4}$ time.

b. March

Type of music written in 4 time. often use of military purposes.

III. Write the suitable one on the given line. (06 marks)

A

1659

48 Preludes and Fugues

Thavil

Ath Rabana

Carrols

Side drum

e.

d.

c.

b.

f.

a.

B

a. Snare drum

b. Viridu

c. Hindu

d. J.S.Bach

e. G.F.Handel

f. Christian


IV. Write a brief description about baroque composer. (04 marks)

<p>Johan Sebastian Bach was a German composer who was born in 1685 and died in 1750. his main works are,</p> <ul style="list-style-type: none"> - Minuet in G - Brandenburg concertos - 48 Preludes & fugues - Christmas oratorio. - Double violin concertos 	<p>George Frideric Handel was a German composer who was born in 1685 and died in 1759. his main works are,</p> <ul style="list-style-type: none"> - Oratorio - Messiah - Water music - Fire music - Rinaldo - Almera. - Harmonious Blacksmith
---	---

5) I. Fill in the blanks.

Symbol	Italian term	English meaning
<i>ff</i>	Fortissimo	Very loud
<i>mf</i>	Mezzo - forte	Moderately loud
<i>mp</i>	Mezzo ^{mp} piano	Moderately soft.
<i>pp</i>	Pianissimo.	Very soft

II. Name the following recorder notes. (04 marks)



a.

b.

a. G

b. C

III. Insert the following instruments into the most related column.

(06 marks)

Timpani, Viola, Triangle, Bass drum, Gong, Castanets, Marimba, Vibraphone, Violin, Cello, Double bass, Xylophone

String Instruments	Definite Pitch	Indefinite Pitch
a. Viola	a. Timpany	a. Triangle
b. Violin	b. Vibraphone	b. Bass drum
c. Cello	c. Xylaphone	c. Gong.
d. Double Bass.	d. Marimba.	d. Castanets

IV. Name the keyboard instruments.

(04 marks)

- a. Piano
- b. Organ
- c. Melodica
- d. Accordion
